

Word Wizard

New word immerse

Symbol/picture



b, c, t

It starts with ...



It rhymes with ...



It has ... syllables



Say the word to your partner



Use the word in a sentence



Action




Song or Rap



Word Wall



Word Pot



Task 1

- What is your favourite book of all time?
- Think about what it was that you liked about the story
- Was it the plot, description of the setting, the characters?
- Explain to someone why you love this book.

Task 2

- Think about your favourite character ever. It could be a book you have read or listened to in English or one that you have read at home.
- Use the prompts on the worksheet to describe your favourite Character. Write your description on the book template. Use the selfie template to draw your character (on next slide)

Character Description


Can you draw a picture of your favourite book character? You could stick a photo of yourself in costume on the sheet too! Can you write a description of the character?


What story are they in?

What do they look like?

What do they do in your favourite story?


Why do you like this character?





Task 4

Design your own favourite character/ book face mask



Task 3
What would your character look like if they took a selfie?
Draw your character



Word Wizard

New word Lunar

Symbol/picture



b, c, t

It starts with ...



It rhymes with ...



It has ... syllables



Say the word to your partner



Use the word in a sentence



Action



Song or Rap



Word Wall



Word Pot

Friday 5th March 2021

In Science, I am learning about the moon and why it changes shape?

Can you explain the lunar cycle?

Lunar cycle satellite orbit reflect surface crater.

Think about these questions.

Why is the moon described as a satellite?

Can the moon support life? Why?- think about what living things need

The moon has lots of craters on its surface. What do you think caused them?

The moon looks so bright in the sky at night- Why?



The moon is a natural satellite of the earth and is a place with no air, no water and no life. It has lots of craters, many of which can be seen with the naked eye, from where it has been hit by meteors. It is brightly lit in the night sky not because it emits its own light but because it reflects the light of the sun. It orbits the earth once every 28 days and as it does so it appears to change shape because of the direction of the sun.



Answer the questions.

Paraphrase the questions in your answers.

Use the correct punctuation!

Friday 5th March 2021

In Science, I am learning about the moon
and why it changes shape?

Can you explain the lunar cycle?

Lunar cycle satellite orbit reflect
surface crater.

Shapes of the Moon



Full Moon



New Moon



Crescent

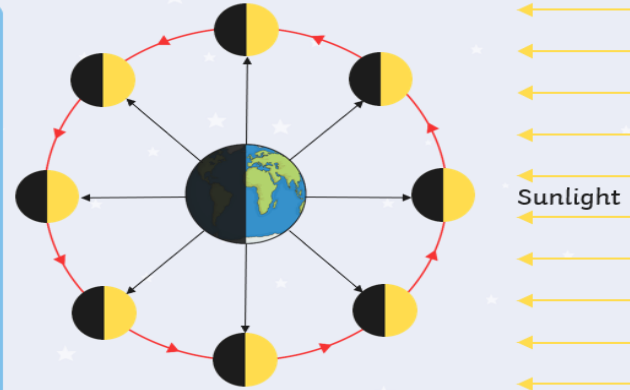


Gibbous

Why Does the Moon Appear to Change Shape?

The Moon reflects the Sun's light.


What part we see of the Moon depends on where the Moon is when orbiting the Earth.




- What does waxing and waning mean?
- What is the difference between a crescent and a gibbous moon?

Waxing and Waning

Waning means that we can see less of the Moon.



Waxing means that we can see more of the Moon.



Crescent and Gibbous

A crescent moon is when we can only see a crescent-shaped area of the Moon.



waning crescent moon



waxing crescent moon

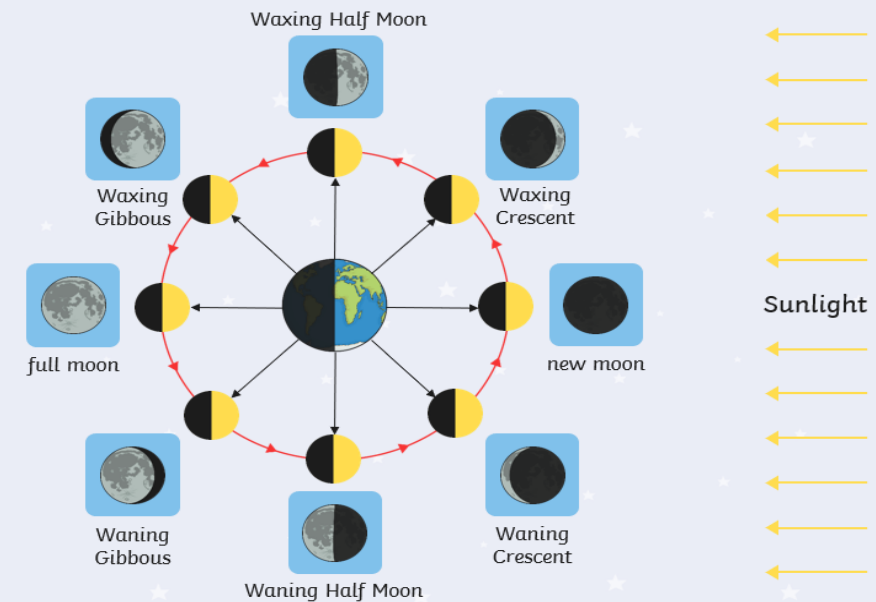
A gibbous moon is when a crescent-shaped area of the Moon cannot be seen.



waning gibbous moon



waxing gibbous moon


































Friday 5th March 2021

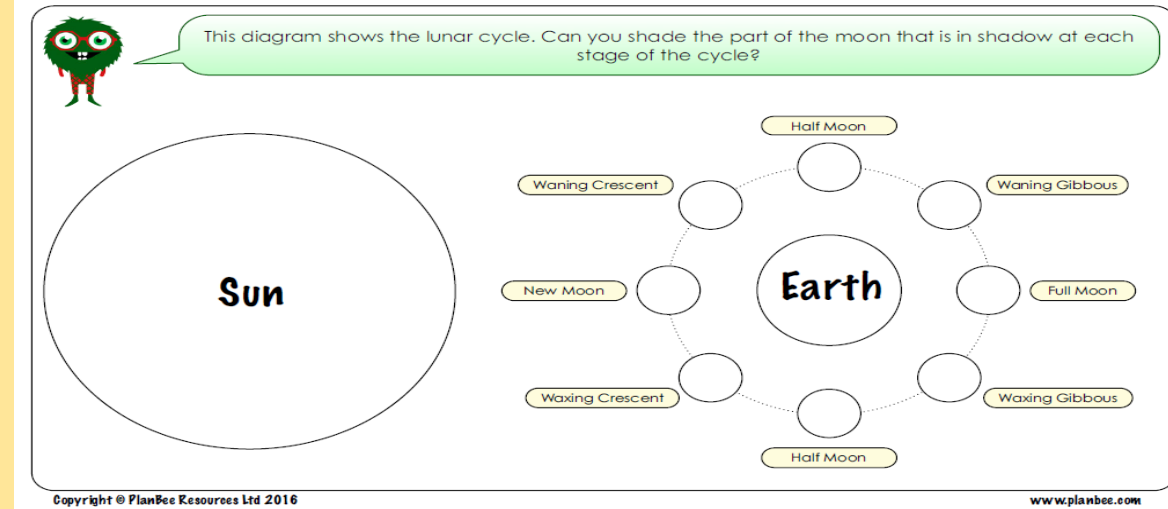
In Science, I am learning about the moon and why it changes shape?

Can you explain the lunar cycle?

Lunar cycle satellite orbit reflect surface crater.

Look at the moon phases and lunar calendar. Complete your own calendar. Label each moon is it waxing or waning?

Monday	Tuesday	Wednesday	Thursday	Friday	Saturday	Sunday
1	2	3	4	5	6	7
						
8	9	10	11	12	13 New	14
						
15	16	17	18	19	20	21
						
22	23	24	25	26	27	28 Full
						
29	30	31				
						



Mon	Tue	Wed	Thurs	Fri	Sat	Sun